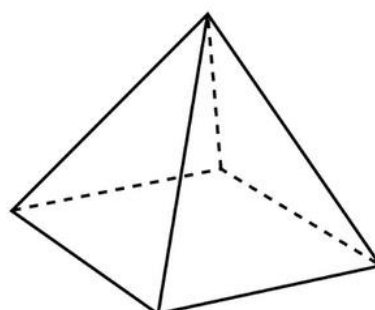
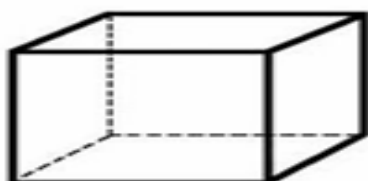

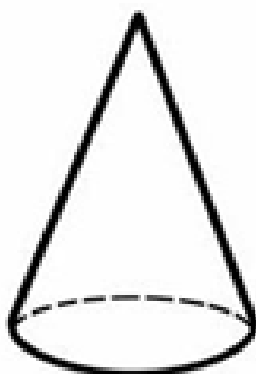

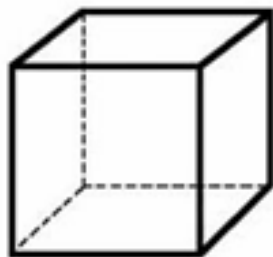


**Key Learning: To name and describe 3-D shapes**



Has 1 curved  
surface.

Has 6 faces.  
Has 12 edges.  
Has 8 vertices.

Has 2 faces.  
Has 1 curved  
surface.  
Has 0 vertices.  
Has 2 edges.

Has 6 faces.  
Has 12 edges.  
Has 8 vertices.

Has 1 face.  
Has 1 curved  
surface.  
Has 1 apex.  
Has 1 edge.

Has 5 faces.  
Has 5 vertices.  
Has 8 edges.