
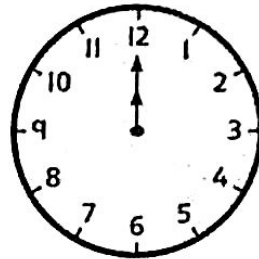
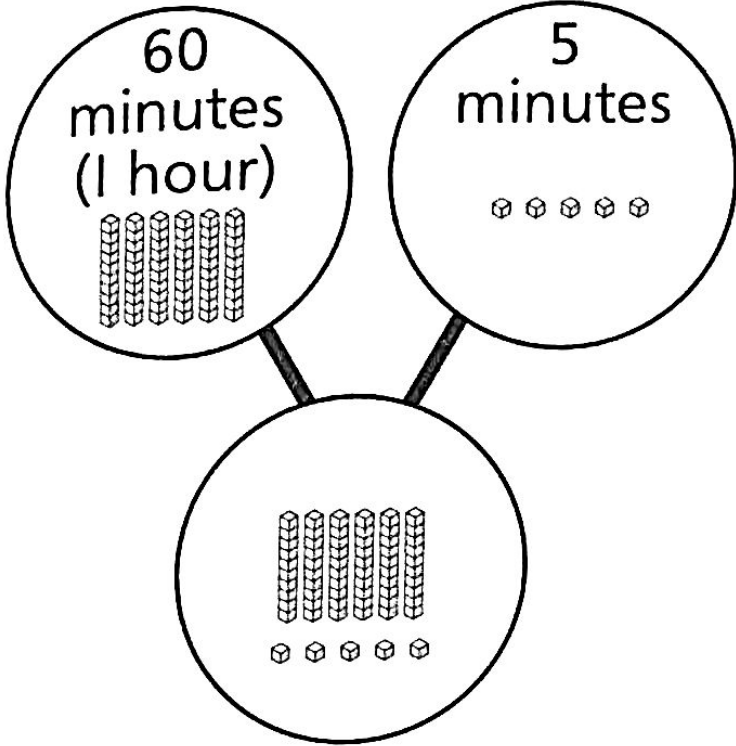


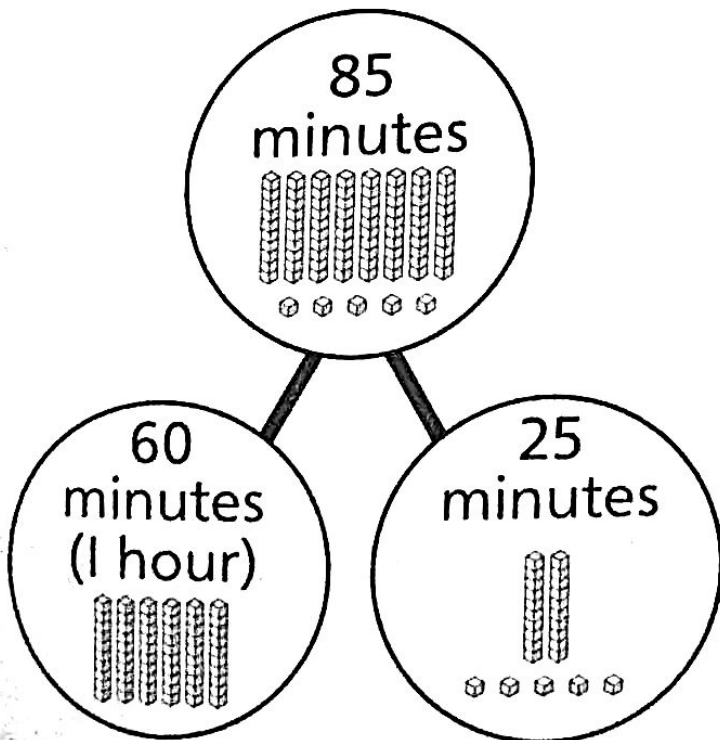


Minutes in an hour

1 1 hour and 5 minutes is the same as minutes.

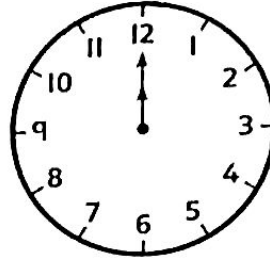
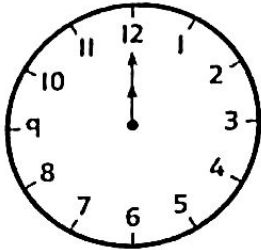


2 Show 85 minutes by colouring the clocks.



- 3** a) A film lasts for 1 hour and 15 minutes.

Colour in the clocks to show this.

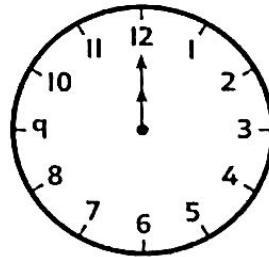
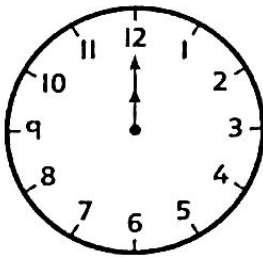


How many minutes does the film last?

The film lasts for minutes.

- b) Another film lasts for 90 minutes.

Colour the clocks to show this.



How many hours and minutes does this film last?

The film lasts for hour and minutes.

4 A plane flight takes more than 1 hour, but less than 77 minutes.



How many minutes could the flight take?



Blank writing area with a pencil icon at the top left corner.

Reflect

How many minutes are in one hour?

I know! It is 12 because the numbers on a clock go up to 12!

That is not correct. But mistakes are great because we can learn from them!



How do you know the answer?

Four horizontal lines for writing an answer.