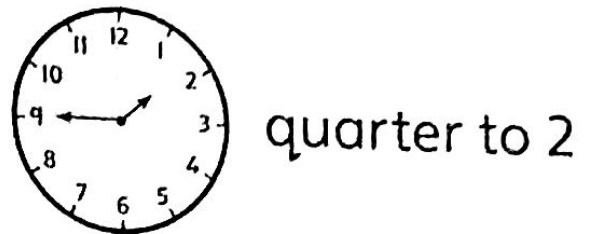
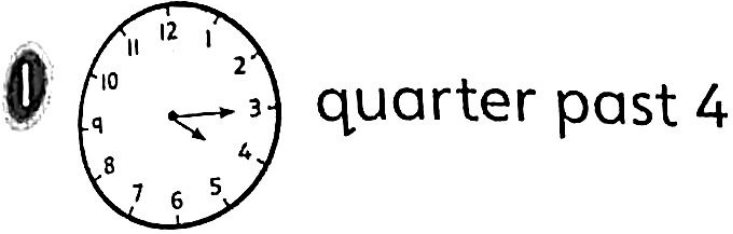
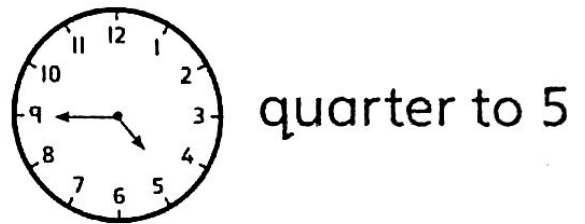


# Telling time to the quarter hour

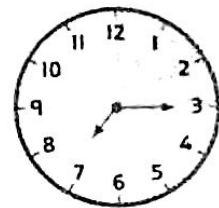


Colour each quarter past or quarter to.

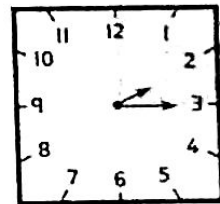


2 Match each clock with the right time.

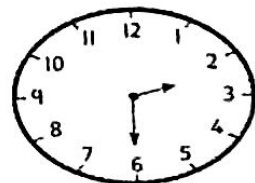
quarter past 2



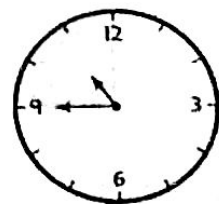
quarter to 11



quarter past 7

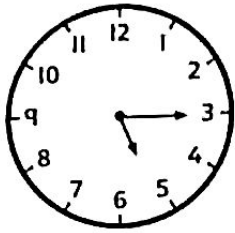


half past 2




**3** What time is it?

a)



b)

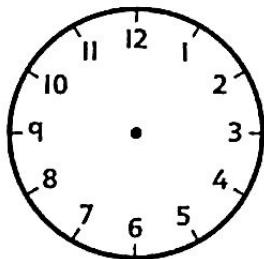


c)

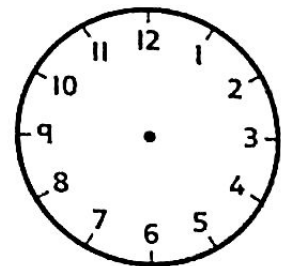
The minute hand is pointing to the 9. The hour hand has almost reached the 5.



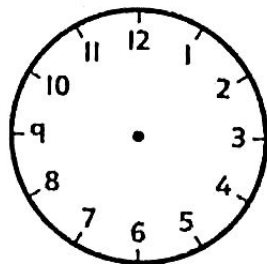
**4** Draw each time on the clocks.



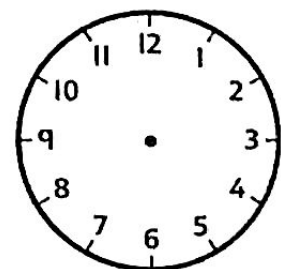
quarter past 6



quarter to 10




quarter past 8




quarter to 4

- 5 Malik has tried to make quarter to 2 on this clock. What mistake has he made?



 \_\_\_\_\_



- 6 What do the words 'past' and 'to' mean in times?



Half past what?  
Quarter to what?

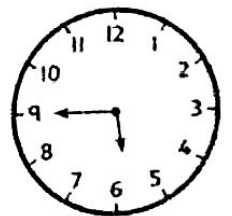
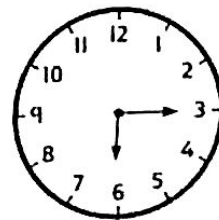

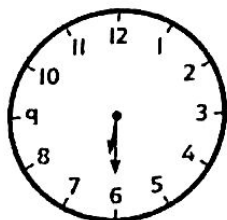


Quarter past a time means \_\_\_\_\_.

Half past a time means \_\_\_\_\_.

Quarter to a time means \_\_\_\_\_.

**Reflect**



Which of these clocks shows quarter to 6?

Tell a partner how you know the answer.