



# Finding durations of time

1 Each car starts at a different time.

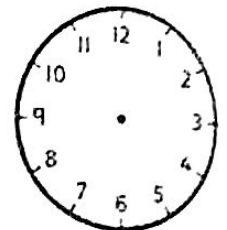
How much time does each car take?




start




finish



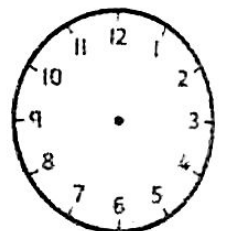

minutes




start



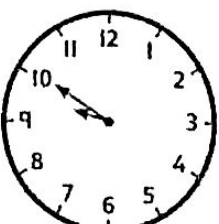
finish



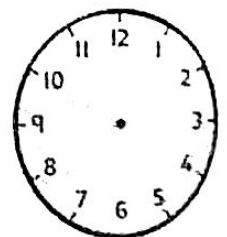

minutes



start



finish




minutes


2 How much time has gone by?

minutes have gone by.



### 3 How much time goes by?

Make ten minutes past 8 on a clock.  
Then move the minute hand to show twenty-five minutes to 9.



Think about how many minutes past 8 is the same as twenty-five to 9.

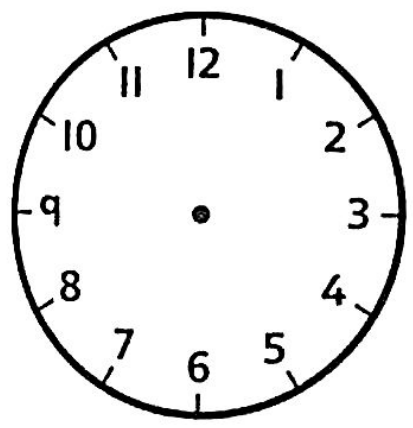


minutes goes by.

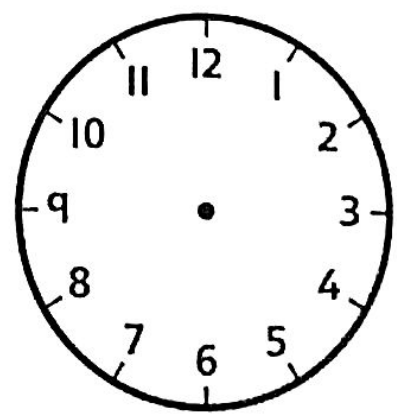
### 4 Class Two's spelling test started at ten minutes past 11. It ended at half past 11.



Draw the start and end times of the test.



start




end

The spelling test was  minutes long.



- 5 A television programme lasts 35 minutes.  
What times could the programme start  
and end?



I can think  
of more than  
one answer!



## Reflect

Mum leaves home at five minutes past 8.

She arrives at school at half past 8.

How long did the journey take?

The journey took  minutes

Tell a partner how you found the answer. Did your partner do it the same way as you?