



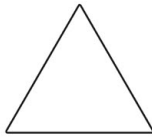
Code Breaking




1



7



3



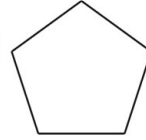
8



4



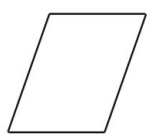
2



9




6



5

Example

In the number



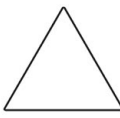
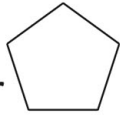
, what is



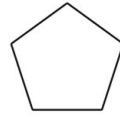
worth?

20

1. In the number




, what is



worth?

2. In the number



, what is



worth?

3. In the number



, what is




worth?

4. In the number

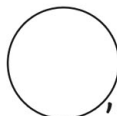
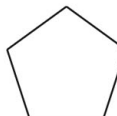


, what is

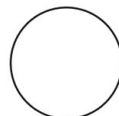


worth?

5. In the number



, what is



worth?

6. In the number

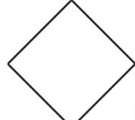


, what is



worth?

7. In the number



, what is



worth?

8. In the number



, what is



worth?

Code Breaking Answers



1) 90

2) 2

3) 10

4) 8

5) 7

6) 4

7) 40

8) 30